

Progress check

Year 6

Mathematics

Paper 2: reasoning and problem solving

First name						
Middle name						
Last name						
Date of birth	Day		Month		Year	
Teacher						

Published Spring 2016

These assessments have been designed by the White Rose Maths Hub.
For more information, please visit www.whiterosemathshub.co.uk

[BLANK PAGE]

Please do not write on this page.

Instructions

You **may not** use a calculator to answer any questions in this test.

Questions and answers

You have **35 minutes** to complete this test.

Follow the instructions for each question.

Work as quickly and as carefully as you can.

If you need to do working out, you can use the space around the question.

Some questions have a method box like this:

Show your method

For these questions you may get a mark for showing your method.

If you cannot do one of the questions, **go on to the next one.**

You can come back to it later, if you have time.


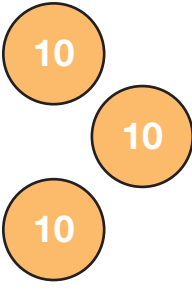
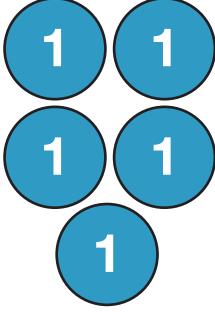


If you finish before the end, **go back and check your work.**

Marks

The number under each line at the side of the page tells you the maximum number of marks for each question.

1

Hazel makes a number on a place value grid.

Hundreds	Tens	Ones	Tenths	Hundredths
				

Hazel adds two more hundredths counters to the grid.

What number does she have now?

1 mark

What is Hazel's number rounded to the nearest whole number?

1 mark

2

Put a tick (✓) if the statement is correct.

$$0.37 \times 1000 = 370$$

$$0.37 \times 10 = 0.370$$

$$0.37 \div 10 = 00.37$$

$$0.37 \div 100 = 0.0037$$

1 mark

3

Here are the prices of some items.



How much do six CDs cost?

1 mark

The shop is having a 25% off sale.

How much does one DVD cost now?

1 mark

4

Fill in the missing digits.

$$\begin{array}{r}
 \boxed{} \\
 \times \boxed{} 7 \\
 \hline
 2 \boxed{} 9 2 \\
 3 5 6 0 \\
 \hline
 \boxed{} \boxed{} \boxed{} 2
 \end{array}$$

2 marks

5

Three children are running a 5 kilometre race for charity.

Harry has run 3.77km

Sam has run 3,792m

Geeta has run $3\frac{3}{4}$ km

Who has run the furthest?

1 mark

How far have they run altogether?

1 mark

7

1 mile = 1.6km

Use this fact to complete the statements.

miles = 4.8km

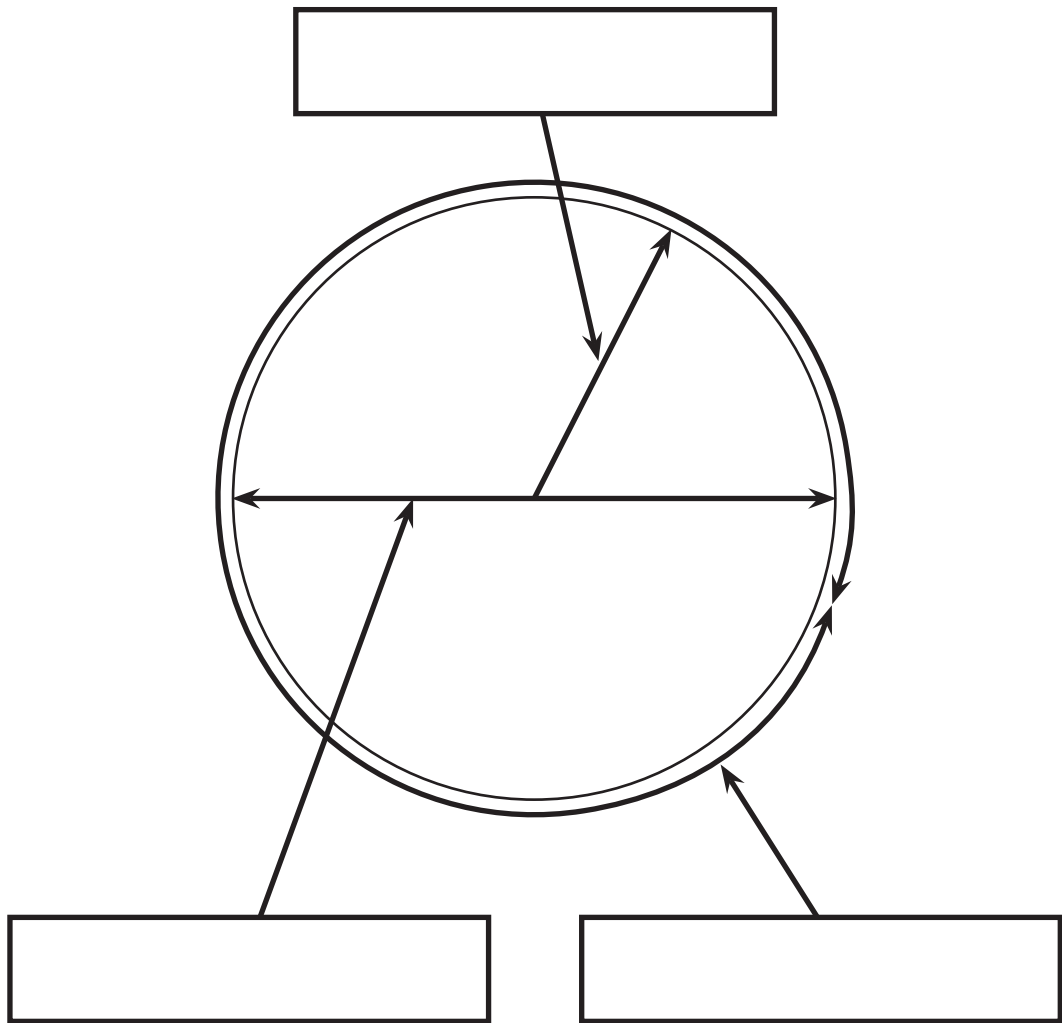
10 miles = km

miles = 400m

2 marks

8

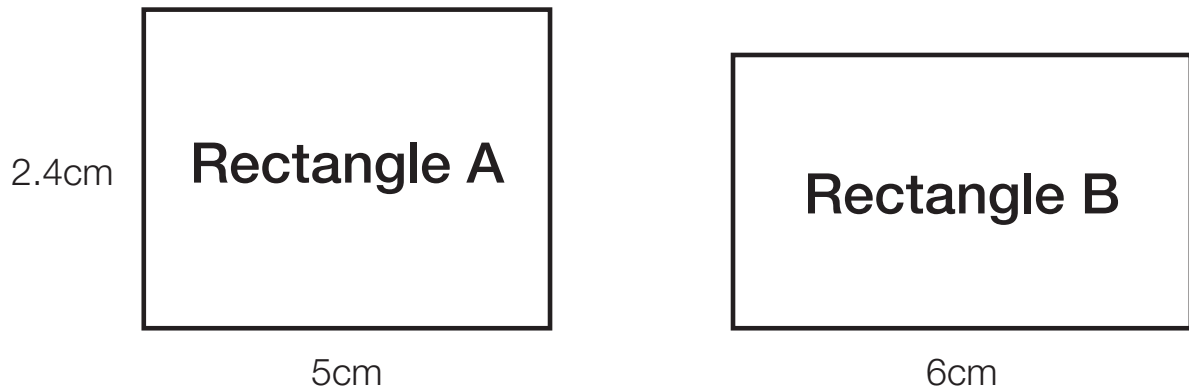
Label the parts of the circle.



1 mark

9

Two rectangles each have the same area.



(not to scale)

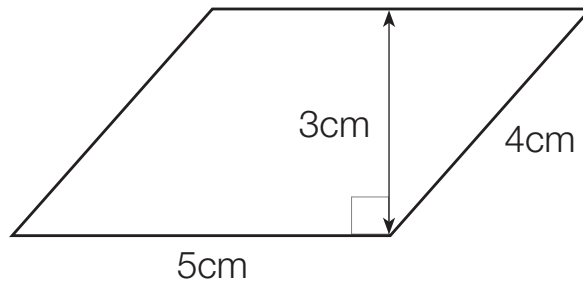
Which shape has got the **largest** perimeter?

Explain your answer.

3 marks

10

Here is a parallelogram.



Calculate the area of the parallelogram.

 cm²

1 mark

11

Fill in the missing number.

$$20\% \text{ of } \boxed{} = \frac{1}{10} \text{ of } 680$$

1 mark

13

Here are the ingredients needed to make 12 cookies.

Ingredients

Sugar 180g

Butter 225g

Eggs..... 2

Flour 0.3kg

How much more flour than sugar is used?

1 mark

How much butter is needed for 48 cookies?

g

1 mark

Mary uses the recipe to make a different amount of cookies.

Mary uses 3 eggs.

How many cookies does she make?

1 mark

14

Fill in the missing numbers.

3	7	12	18	25		
---	---	----	----	----	--	--

0.5		1.3	1.7		
-----	--	-----	-----	--	--

2 marks

15

$$a + b = 14$$

a and b are whole numbers.

a is a one digit number.

b is a two digit number.

Find four different possibilities for a and b.

a	b

1 mark

17

Five numbers have a mean of 12
Here are four of the numbers.

13 12 9 16

What is the fifth number?

Show
your
method

2 marks

END OF TEST

[BLANK PAGE]

Please do not write on this page.

[BLANK PAGE]

Please do not write on this page.